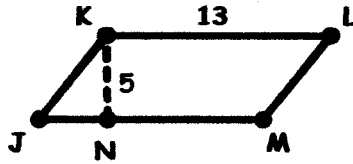
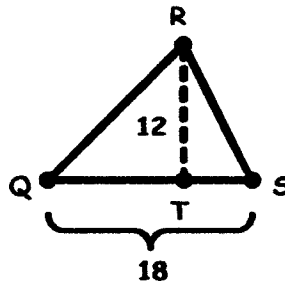

GEOMETRY PLACEMENT TEST

Find the area of each figure below. Use 3.14 for π .

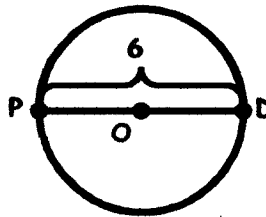
27. \overline{KN} is an altitude of parallelogram $JKLM$.



28. \overline{RT} is an altitude of $\triangle QRS$.



29. \overline{PD} is a diameter of $\odot O$.



Answer the problem below.

30. Find the volume of the rectangular solid.

